

1 Match the numbers to the Roman numerals.

1

X

5

V

10

I

2 Write the Roman numerals as numbers.


- a) II b) VI c) III d) XI e) VII f) IX

3 Complete the number track.

I	II		IV		VI	VII		IX	
---	----	--	----	--	----	-----	--	----	--

What patterns do you notice?

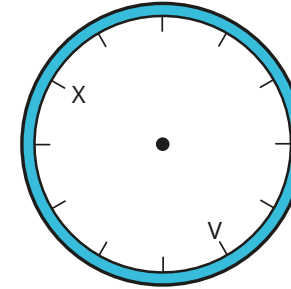
4 Tiny is writing the number 6 in Roman numerals.



IIIIII


Do you agree with Tiny?
Explain your answer.

5 What Roman numerals are missing from the clock?

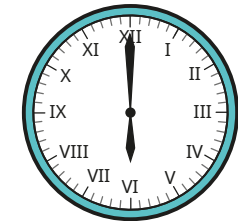


6 Write the times shown on the clocks.


a)



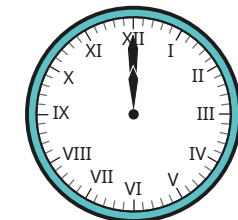
c)



b)



d)



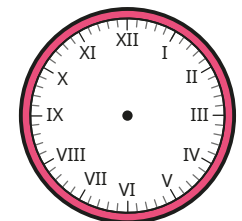
7 Draw hands on a clock with Roman numerals to show each time.

a) 3 o'clock

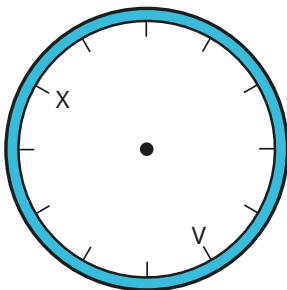
c) 11 o'clock

b) 7 o'clock





d) 8 o'clock



5 What Roman numerals are missing from the clock?



6 Write the times shown on the clocks.



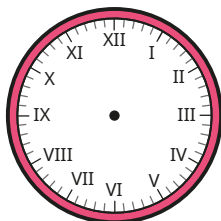
7 Draw hands on a clock with Roman numerals to show each time.

a) 3 o'clock

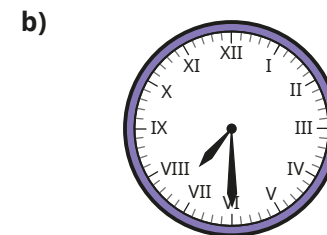
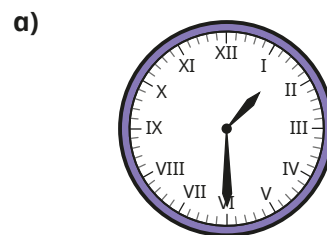
c) 11 o'clock

b) 7 o'clock

d) 8 o'clock



8 Write the times shown on the clocks.

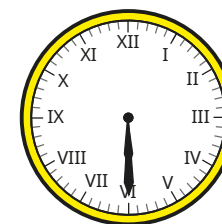


9 Draw hands on a clock with Roman numerals to show each time.

a) half past 10

b) half past 4

10 Max has drawn hands on the clock to show half past 6



a) Explain the mistake that Max has made.

b) Where should the hands be to show half past 6?

